



Mental arithmetic



A

Observe Geom's drawing and find the three mistakes that Squeaky has made. Then continue Geom's drawing.



B

With your measuring rod (graduated with cm), measure the lengths of these lines and complete the sentences.

This line measures _____ cm.


This line measures _____ cm.

This line measures _____ cm.

The longest line is the _____ one. (You can use the list of colours on page 106).

D

Answer in the small clouds.



Here, there are _____ beetles.

Altogether, on pages 123 and 124, there are _____ beetles.

E

A. Mental arithmetic: addition equations of a two-digit number chosen between 10 and 19 to a one-digit number with a result < 20 (same activity as on page 114).

B and C. The task is more difficult than the one on page 120 because the same drawing can contain shapes of the same form but of different sizes (the 3 circles of the first snowman for example) or contain shapes which differ both in form and in size (the house for example).→