

Reading numbers

64

72

74

62

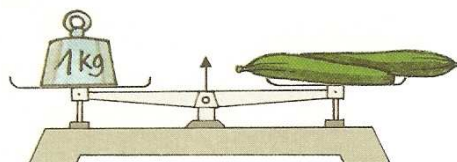
60

70


66

A


Observe: 1kg is approximately as heavy as...



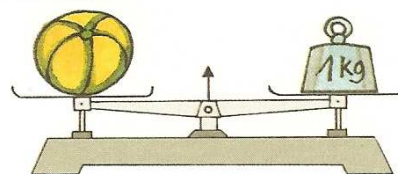
2 cucumbers



5 middle-sized tomatoes



4 big bananas



1 big melon

B

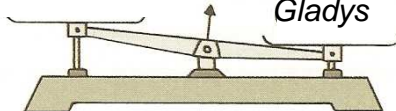
Dédé weighs 23kg. He imagines himself on the scale.



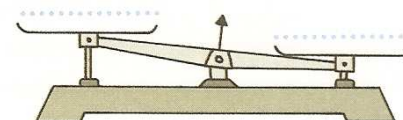
Observe the table below and write down in the pans of the scales.

The cat

Gladys



Gladys and her cat are compared.




Gladys and Dédé are compared.

How many kg?

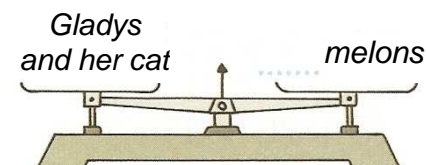
Dédé ..... 23

Gladys ..... 19

Gladys' cat ..... 2



The cat and Dédé



How many melons weighing 1kg each?