


Now it is your turn to draw.




C


Draw as
Dédé does.




6




9



7




10



D

Imagine the box and calculate.
If you aren't sure, draw the marbles.



$4 + 3 = \dots\dots\dots$

$2 + 6 = \dots\dots\dots$

$4 + 4 = \dots\dots\dots$

$2 + 5 = \dots\dots\dots$

$3 + 7 = \dots\dots\dots$

$4 + 6 = \dots\dots\dots$

$6 + 3 = \dots\dots\dots$

$7 + 2 = \dots\dots\dots$

E