
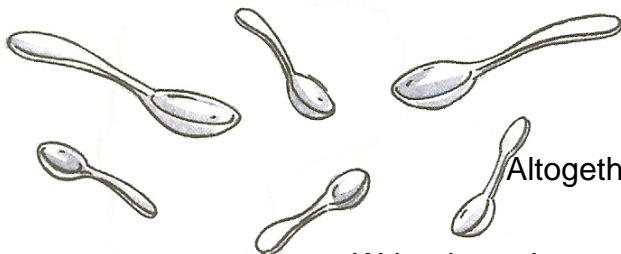



## Mental arithmetic




A

Answer.

There are  big spoons.There are  tea spoons.Altogether, there are .Write down the corresponding equation: .There are  apples.There are  pears.Altogether, there are .Write down the corresponding equation: .

B

Imagine the box and calculate. If you aren't sure, draw the marbles.


 $5 + 3 = \dots\dots\dots$ 
 $2 + 7 = \dots\dots\dots$ 
 $1 + 7 = \dots\dots\dots$ 
 $5 + 5 = \dots\dots\dots$ 

C

Count and cross out.

13



15




14



D

Complete the number line.



E